

# Conceptual Bell Work

Valerie Faulkner  
SAS High Five  
Math Summit  
August 6, 2015



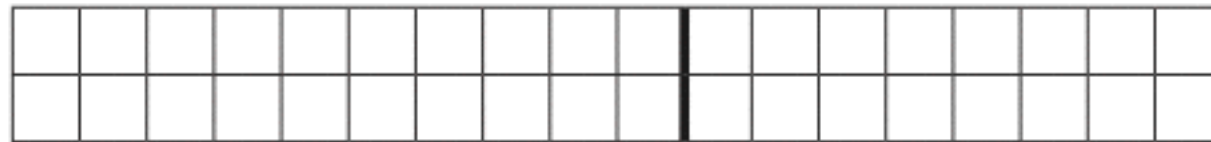
# Money Money Money

## Base Ten



# Arithmetic Properties!

1. Amanda and Jenn each have \$18.  
How much do they have altogether?



1.  $6 + 5 - 5 =$  \_\_\_\_\_

$$-4 + 9$$

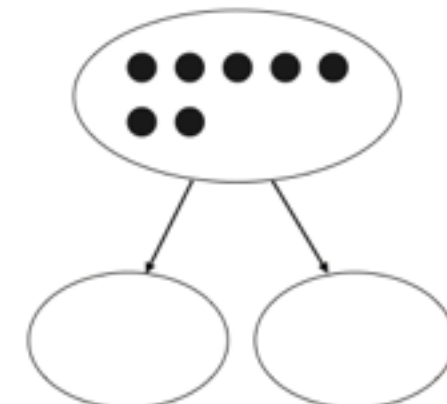
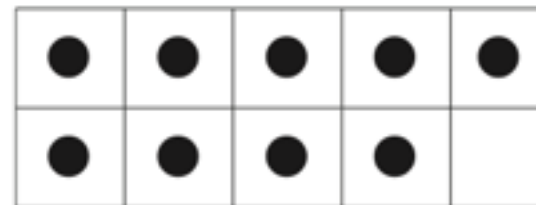
$$-4 + (\text{ } + \text{ })$$

$$(-4 + \text{ }) + \text{ }$$

$$(0) + \text{ }$$

\_\_\_\_\_

6.  $9 + 7$



Makes 10

Left over

# Proportional Reasoning



This Card is worth  
**One Hour!**